




The Problem With Dice



A



B



C

Above are three identical dice shown in three different positions. By comparing them, answer the following questions about the faces you cannot see:

1. What number is opposite the 4?
2. What number is opposite the 5?
3. What number is opposite the 1?
4. What number is on the bottom of A?
5. What number is on the bottom of B?
6. What number is on the bottom of C?